

What are factors and multiples? Check out this link if you would like a recap:

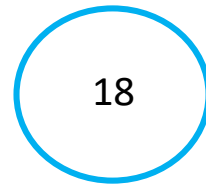
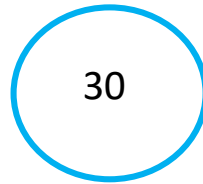
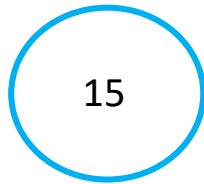
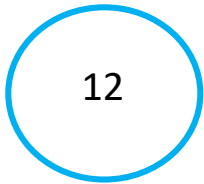
<https://www.bbc.co.uk/bitesize/articles/zfchpgg8>

What are factors? Use this link if you would like a reminder:

<https://www.bbc.co.uk/bitesize/topics/zfq7hyc/articles/zp6wfcw>

Multiples

Find the first 5 multiples for the following bubbles.



Factors

To find the **factors** of a number, you need to find all the pairs of numbers that multiply together to make a **product**.

$$2 \times 5 = 10$$

2 and 5 are **factors**. 10 is the **product**.

Fill in the missing factors for these products:

20	○	○	○	○	○	○
27	○	○	○	○		
12	○	○	○	○	○	○
15	○	○	○	○		

Have a go at this online game. Which lands can you explore this week?

<https://www.bbc.co.uk/bitesize/topics/zd2f7nb/articles/zn2y7nb>