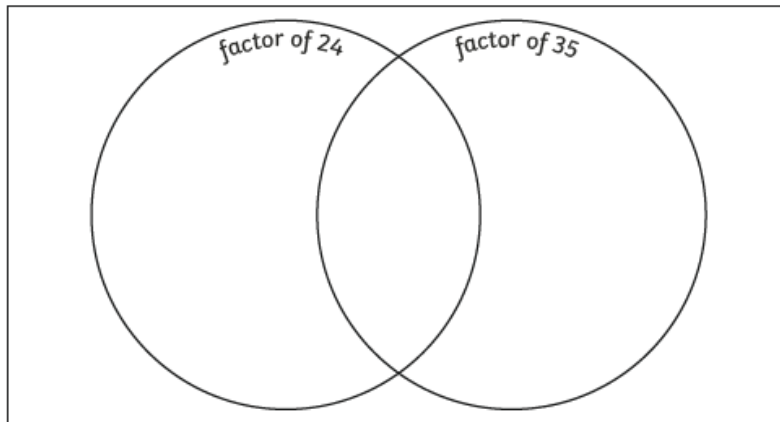


To refresh your knowledge of common factors, check out this web link

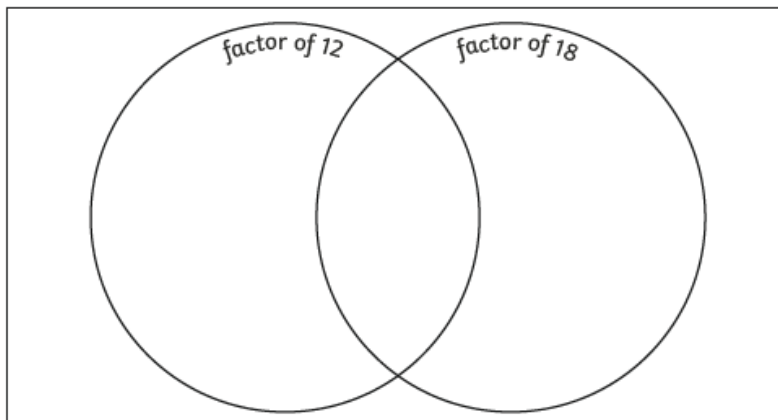
<https://www.bbc.co.uk/bitesize/topics/z6j2tfr/articles/z72r97h>

- 1) Place the numbers 1-35 correctly onto the Venn diagram.



What are the common factors? _____

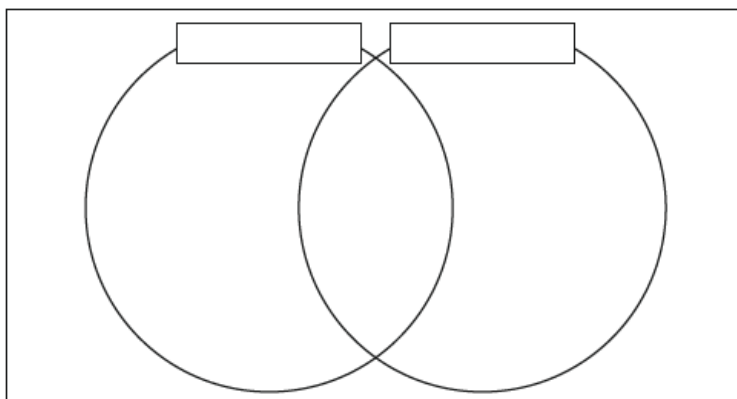
- 2) Place the numbers 1-18 correctly onto the Venn diagram.



What are the common factors? _____

What is the highest common factor? _____

- 3) Choose two numbers to compare. Complete the Venn diagram and identify the highest common factor.



The highest common factor is _____.

Have a go at this online game. Which lands can you explore this week?

<https://www.bbc.co.uk/bitesize/topics/zd2f7nb/articles/zn2y7nb>