

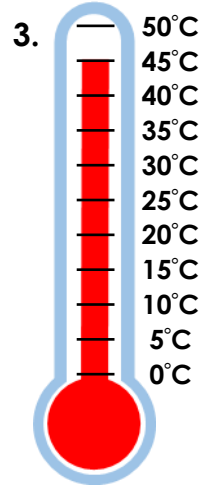
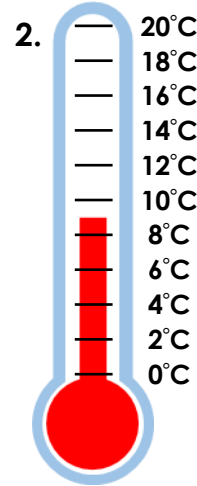
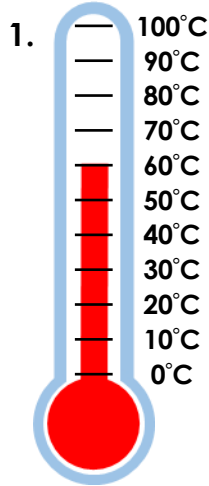
Temperature

1. Match each thermometer to the correct statement.

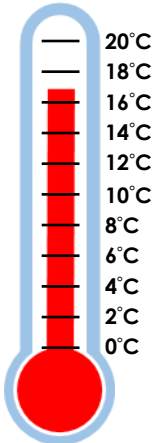
A. The temperature is not the highest or lowest.

B. The temperature is an even number.

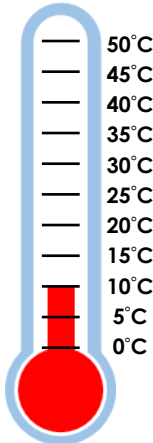
C. The temperature is less than 10°C.



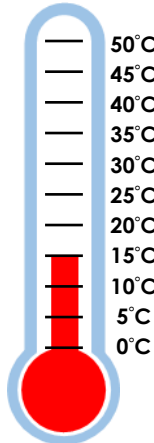
2. Order the temperatures from lowest to highest.



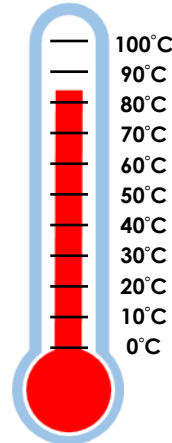
A.



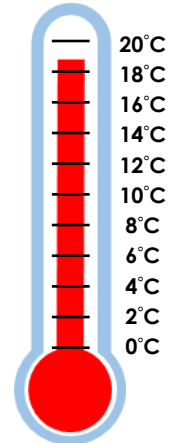
B.



C.



D.



E.

3. Luna and Nora are comparing thermometers. Who do you agree with? Explain why.




Luna

A has a higher temperature because the red line is longer.

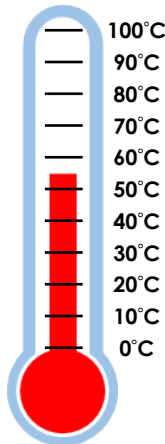


Nora

B has a higher temperature because 55°C is greater than 40°C.



A.



B.