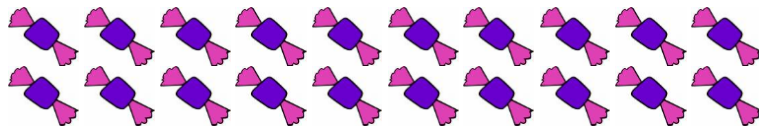



09.02.21 LO : *Understand division as sharing (into equal groups)*

Use your counting apparatus or draw circles/crosses to divide

Divide these sweets into 5 equal groups:



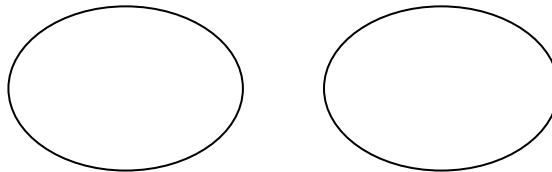
$20 \div 5 =$



Divide these bananas into 2 equal groups:



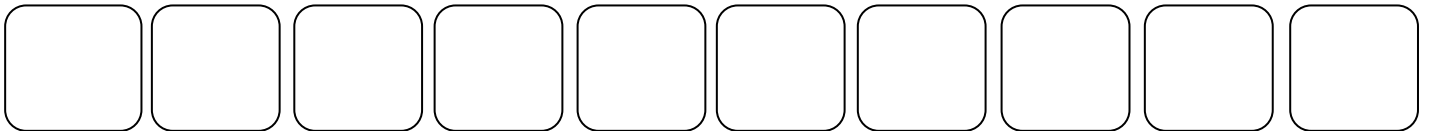
$12 \div 2 =$



Divide these cakes into 10 equal groups:



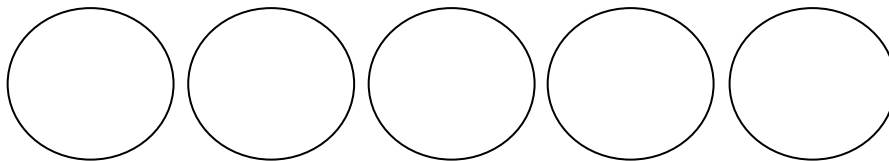
$20 \div 10 =$




Divide these cherries into 5 equal groups:



$5 \div 5 =$



Divide these sandwiches into 2 equal groups:



Can you calculate these division equations by drawing into groups/ circles?

$18 \div 6 =$

$27 \div 3 =$

$32 \div 4 =$

$19 \div 3 =$

$35 \div 8 =$

