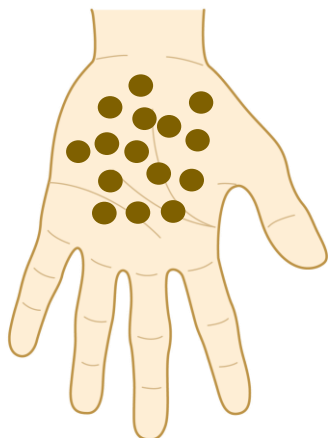




Sharing Equally

4. Bob has 3 plant pots and 15 seeds. Draw the plant pots and share the seeds equally to show how many he can put in each pot.




VF
HW/Ext

5. Circle the number to show how many bread sticks will be in each bag if they are shared equally between them.



VF
HW/Ext

6. True or false? If 25 marbles are shared equally between 5 children, they will get 4 marbles each.



Prove it!



RPS
HW/Ext