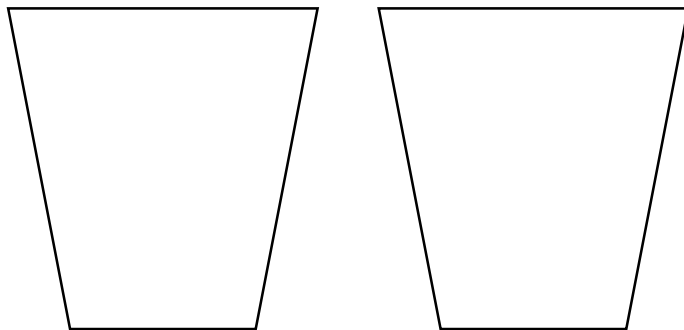


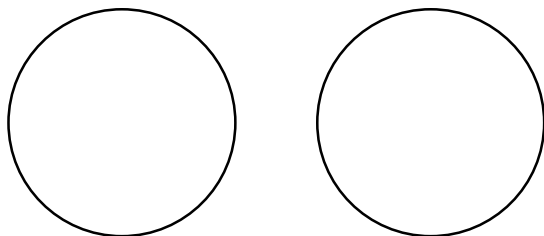
Sharing Equally

1. David has 2 pots and 14 buttons. Share the buttons equally to show how many he can put in each pot.




VF
HW/Ext

2. Circle the number to show how many balls will be in each hoop if they are shared equally between them.



VF
HW/Ext

3. True or false? If 16 jewels are shared equally between 2 children, they will get 6 jewels each.



Prove it!



RPS
HW/Ext