
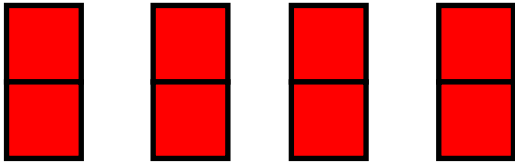


LO: Record equal group images as repeated addition equations




There are _____ equal groups with _____ in each group.

$$\underline{\quad} + \underline{\quad} + \underline{\quad} =$$




There are _____ equal groups with _____ in each group.

$$\underline{\quad} + \underline{\quad} + \underline{\quad} + \underline{\quad} =$$



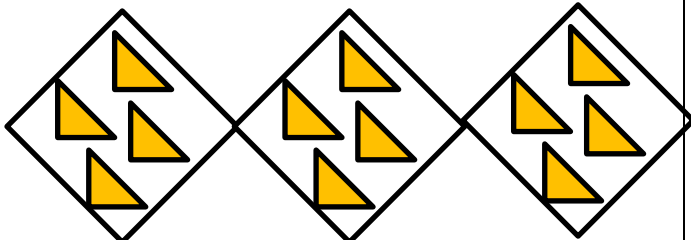
There are _____ equal groups with _____ in each group.

$$\underline{\quad} + \underline{\quad} + \underline{\quad} =$$



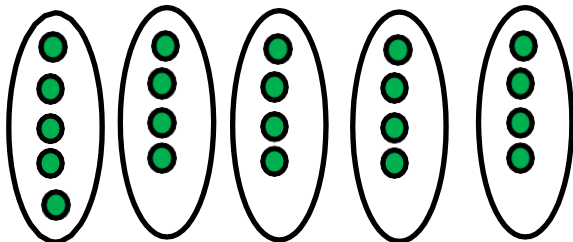
There are _____ equal groups with _____ in each group.

$$\underline{\quad} + \underline{\quad} + \underline{\quad} + \underline{\quad} + \underline{\quad} =$$



There are _____ equal groups with _____ in each group.

$$\underline{\quad} + \underline{\quad} + \underline{\quad} =$$



There are _____ equal groups with _____ in each group.


$$\underline{\quad} + \underline{\quad} + \underline{\quad} + \underline{\quad} + \underline{\quad} =$$



There are _____ equal groups with _____ in each group.

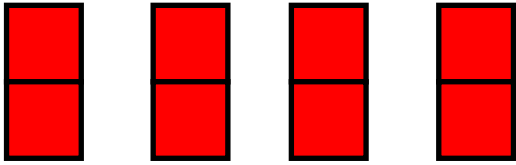
$$\underline{\quad} + \underline{\quad} + \underline{\quad} =$$

LO: Record equal group images as repeated addition equations




There are _____ equal groups with _____ in each group.


_____ + _____ + _____ =



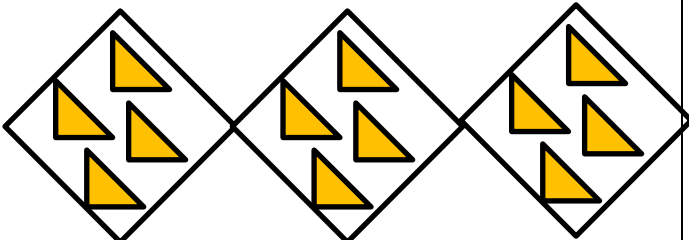
There are _____ equal groups with _____ in each group.



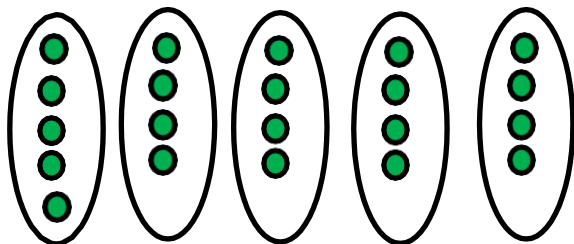
There are _____ equal groups with _____ in each group.



There are _____ equal groups with _____ in each group.



There are _____ equal groups with _____ in each group.



There are _____ equal groups with _____ in each group.



There are _____ equal groups with _____ in each group.

