



To understand multiplication as an array.

Fill in the gaps in these number sentences using the array to help you.



$$4 \times \square = 8$$




$$\square \times 3 = 9$$



$$2 \times \square = 10$$



$$\square \times 5 = 15$$



$$4 \times \square = 16$$



$$\square \times 3 = 12$$

Can you draw arrays to show these equations?

$$4 \times 3 = 12$$

$$10 \times 2 = 20$$

$$8 \times 2 = 16$$

$$3 \times 6 = ?$$

$$8 \times 4 = ?$$