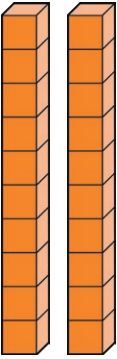
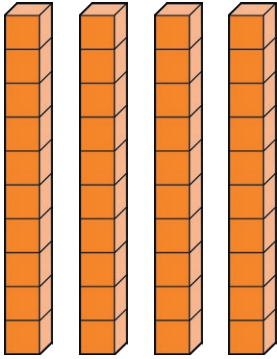
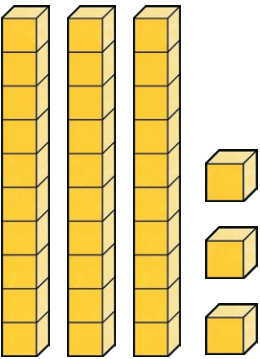
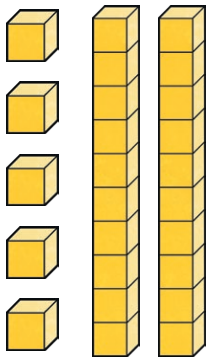
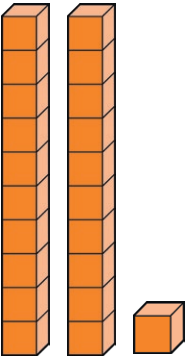


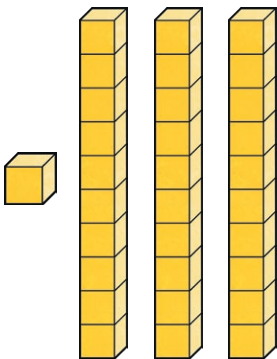
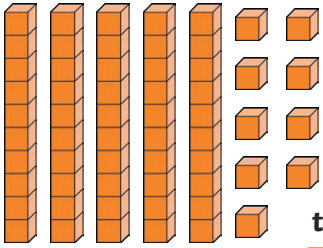
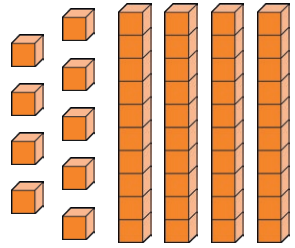
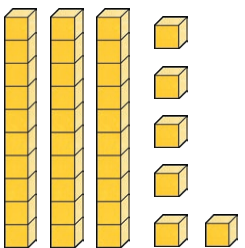
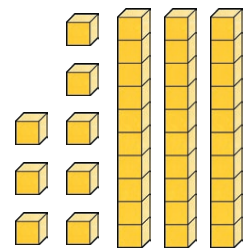
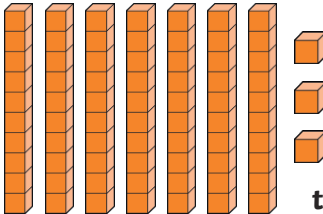
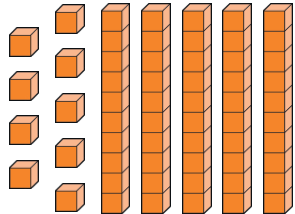
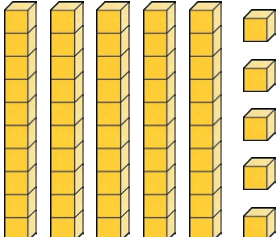
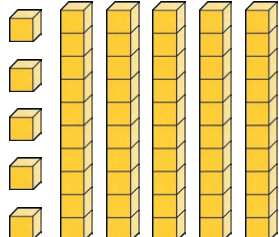


# Greater Than or Less Than

Compare these numbers. Write the number shown by the pictures then circle the correct sign. The first one is an example.



 <p>tens ones 2 4</p>	<p>more than <b>less than</b> equal to</p>	<p>tens ones 4 2</p> 
 <p>tens ones <input type="text"/> <input type="text"/></p>	<p>more than less than equal to</p>	<p>tens ones <input type="text"/> <input type="text"/></p> 
 <p>tens ones <input type="text"/> <input type="text"/></p>	<p>more than less than equal to</p>	<p>tens ones <input type="text"/> <input type="text"/></p> 
 <p>tens ones <input type="text"/> <input type="text"/></p>	<p>more than less than equal to</p>	<p>tens ones <input type="text"/> <input type="text"/></p> 

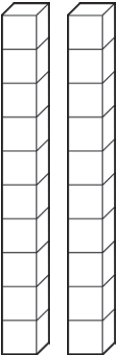
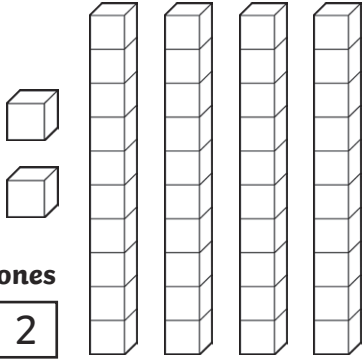
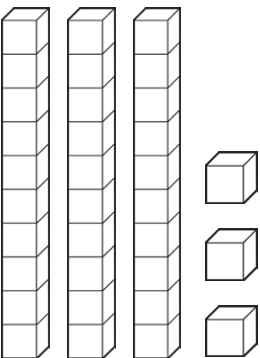
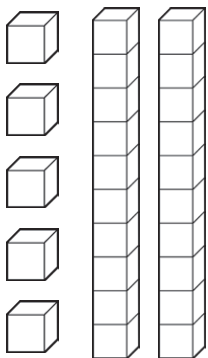
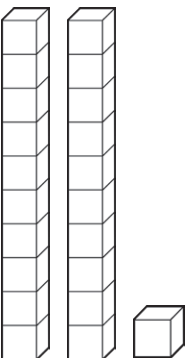
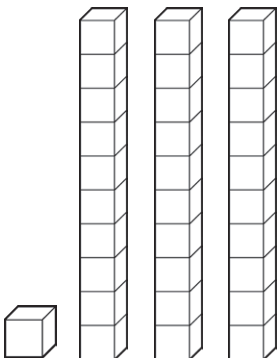
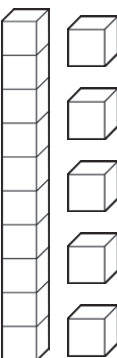
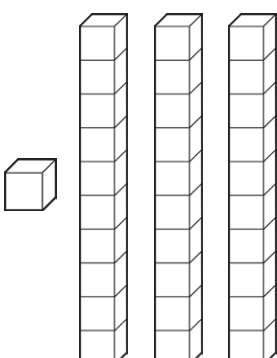
 <p>tens ones</p> <input type="text"/> <input type="text"/>	<p>more than    less than    equal to</p>	 <p>tens ones</p> <input type="text"/> <input type="text"/>
 <p>tens ones</p> <input type="text"/> <input type="text"/>	<p>more than    less than    equal to</p>	 <p>tens ones</p> <input type="text"/> <input type="text"/>
 <p>tens ones</p> <input type="text"/> <input type="text"/>	<p>more than    less than    equal to</p>	 <p>tens ones</p> <input type="text"/> <input type="text"/>
 <p>tens ones</p> <input type="text"/> <input type="text"/>	<p>more than    less than    equal to</p>	 <p>tens ones</p> <input type="text"/> <input type="text"/>

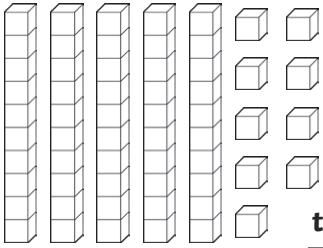
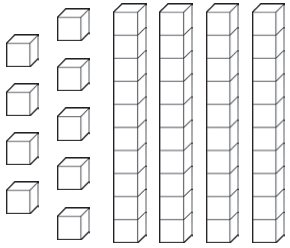
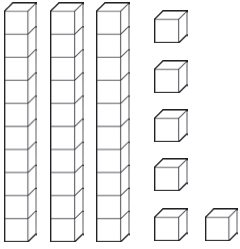
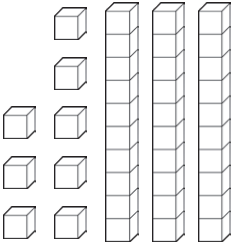

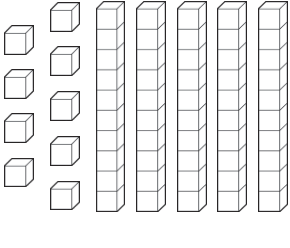
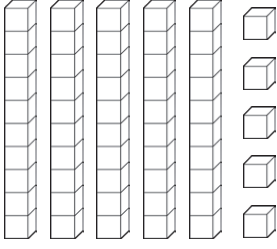
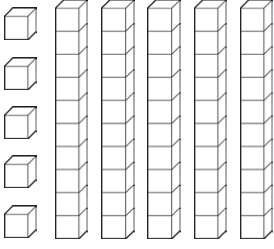


# Greater Than or Less Than **Answers**

Compare these numbers. Write the number shown by the pictures then circle the correct sign. The first one is an example.



 <p style="text-align: right;">tens ones</p> <div style="display: flex; justify-content: space-around;"> <div style="border: 1px solid black; padding: 2px;">2</div> <div style="border: 1px solid black; padding: 2px;">4</div> </div>	<p>more than <span style="border: 1px solid black; border-radius: 50%; padding: 5px;">less than</span> equal to</p>	 <p style="text-align: right;">tens ones</p> <div style="display: flex; justify-content: space-around;"> <div style="border: 1px solid black; padding: 2px;">4</div> <div style="border: 1px solid black; padding: 2px;">2</div> </div>
 <p style="text-align: right;">tens ones</p> <div style="display: flex; justify-content: space-around;"> <div style="border: 1px solid black; padding: 2px;">3</div> <div style="border: 1px solid black; padding: 2px;">3</div> </div>	<p><span style="border: 1px solid black; border-radius: 50%; padding: 5px;">more than</span> less than equal to</p>	 <p style="text-align: right;">tens ones</p> <div style="display: flex; justify-content: space-around;"> <div style="border: 1px solid black; padding: 2px;">2</div> <div style="border: 1px solid black; padding: 2px;">5</div> </div>
 <p style="text-align: right;">tens ones</p> <div style="display: flex; justify-content: space-around;"> <div style="border: 1px solid black; padding: 2px;">2</div> <div style="border: 1px solid black; padding: 2px;">1</div> </div>	<p>more than <span style="border: 1px solid black; border-radius: 50%; padding: 5px;">less than</span> equal to</p>	 <p style="text-align: right;">tens ones</p> <div style="display: flex; justify-content: space-around;"> <div style="border: 1px solid black; padding: 2px;">3</div> <div style="border: 1px solid black; padding: 2px;">1</div> </div>
 <p style="text-align: right;">tens ones</p> <div style="display: flex; justify-content: space-around;"> <div style="border: 1px solid black; padding: 2px;">1</div> <div style="border: 1px solid black; padding: 2px;">5</div> </div>	<p>more than <span style="border: 1px solid black; border-radius: 50%; padding: 5px;">less than</span> equal to</p>	 <p style="text-align: right;">tens ones</p> <div style="display: flex; justify-content: space-around;"> <div style="border: 1px solid black; padding: 2px;">3</div> <div style="border: 1px solid black; padding: 2px;">1</div> </div>

 <p>tens ones <b>5 9</b></p>	<p>more than less than equal to</p> <p><b>more than</b></p>	 <p>tens ones <b>4 9</b></p>
 <p>tens ones <b>3 6</b></p>	<p>more than less than equal to</p> <p><b>less than</b></p>	 <p>tens ones <b>3 8</b></p>
 <p>tens ones <b>7 3</b></p>	<p>more than less than equal to</p> <p><b>more than</b></p>	 <p>tens ones <b>5 9</b></p>
 <p>tens ones <b>5 5</b></p>	<p>more than less than equal to</p> <p><b>equal to</b></p>	 <p>tens ones <b>5 5</b></p>

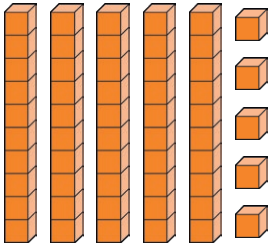
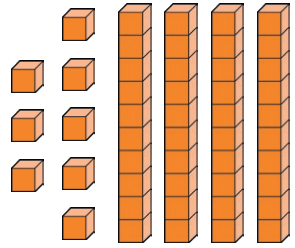
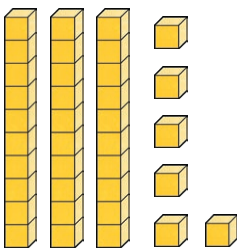
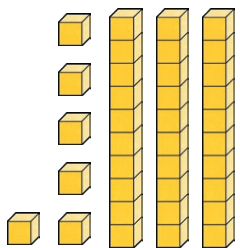
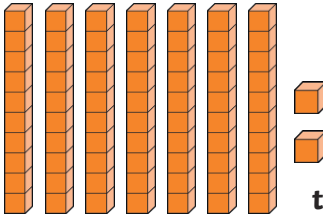
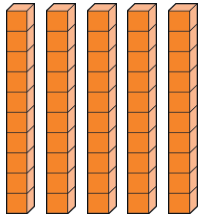

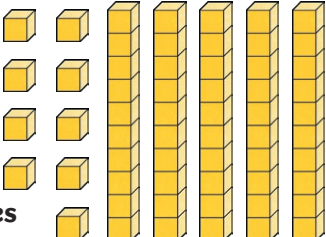


# Greater Than or Less Than

Compare these numbers. Write the number shown by the pictures then circle the correct sign. The first one is an example.



<p>tens ones 3 2</p>	<p>&gt; &lt; =</p>	<p>tens ones 2 4</p>
<p>tens ones   </p>	<p>&gt; &lt; =</p>	<p>tens ones   </p>
<p>tens ones   </p>	<p>&gt; &lt; =</p>	<p>tens ones   </p>
<p>tens ones   </p>	<p>&gt; &lt; =</p>	<p>tens ones   </p>

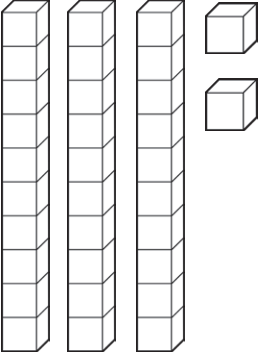
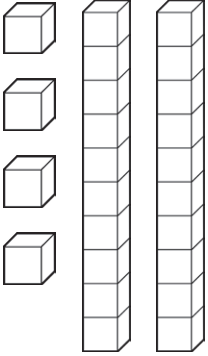
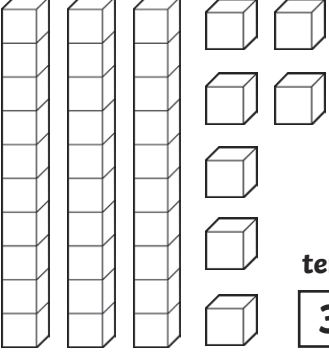
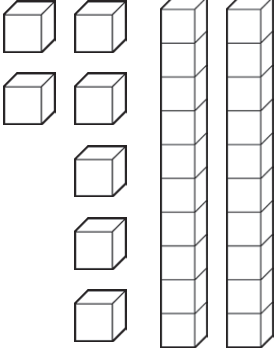
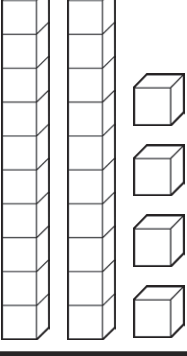
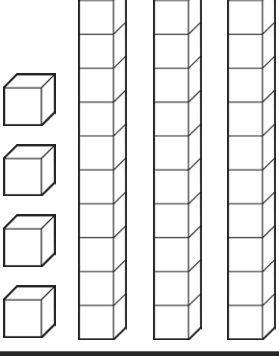
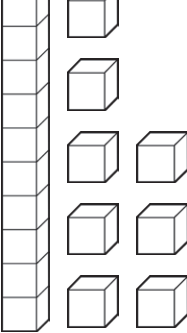

 <p>tens ones</p> <input type="text"/> <input type="text"/>	<p>&gt; &lt; =</p>	 <p>tens ones</p> <input type="text"/> <input type="text"/>
 <p>tens ones</p> <input type="text"/> <input type="text"/>	<p>&gt; &lt; =</p>	 <p>tens ones</p> <input type="text"/> <input type="text"/>
 <p>tens ones</p> <input type="text"/> <input type="text"/>	<p>&gt; &lt; =</p>	 <p>tens ones</p> <input type="text"/> <input type="text"/>
 <p>tens ones</p> <input type="text"/> <input type="text"/>	<p>&gt; &lt; =</p>	 <p>tens ones</p> <input type="text"/> <input type="text"/>

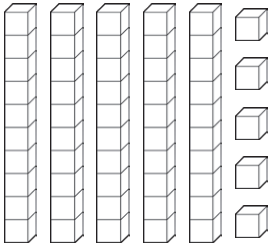
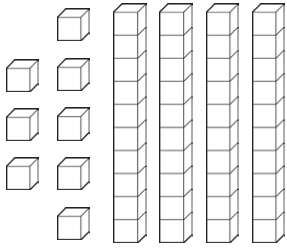
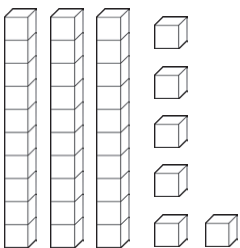
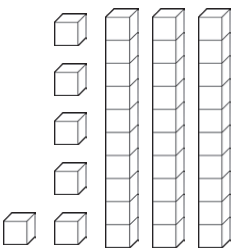
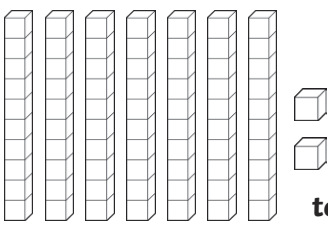

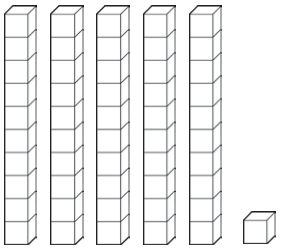
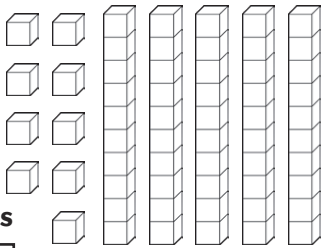


# Greater Than or Less Than **Answers**

Compare these numbers. Write the number shown by the pictures then circle the correct sign. The first one is an example.



 <p>tens ones <b>3</b> <b>2</b></p>	<p><b>&gt;</b> <b>&lt;</b> <b>=</b></p>	 <p>tens ones <b>2</b> <b>4</b></p>
 <p>tens ones <b>3</b> <b>7</b></p>	<p><b>&gt;</b> <b>&lt;</b> <b>=</b></p>	 <p>tens ones <b>2</b> <b>7</b></p>
 <p>tens ones <b>2</b> <b>4</b></p>	<p><b>&gt;</b> <b>&lt;</b> <b>=</b></p>	 <p>tens ones <b>3</b> <b>4</b></p>
 <p>tens ones <b>1</b> <b>8</b></p>	<p><b>&gt;</b> <b>&lt;</b> <b>=</b></p>	 <p>tens ones <b>3</b> <b>6</b></p>









 <p>tens ones 5 5</p>	<p><math>&gt;</math> <math>&lt;</math> <math>=</math></p>	 <p>tens ones 4 8</p>
 <p>tens ones 3 6</p>	<p><math>&gt;</math> <math>&lt;</math> <math>=</math></p>	 <p>tens ones 3 6</p>
 <p>tens ones 7 2</p>	<p><math>&gt;</math> <math>&lt;</math> <math>=</math></p>	 <p>tens ones 5 0</p>
 <p>tens ones 5 1</p>	<p><math>&gt;</math> <math>&lt;</math> <math>=</math></p>	 <p>tens ones 5 9</p>



# Greater Than or Less Than

Compare these numbers in numerals and words. Circle the correct sign.



 56	> < =	 forty-nine
two tens and three ones 	> < =	 32
 87	> < =	 eighty-seven
sixty-three 	> < =	 36









	<p>&gt; &lt; =</p>	
	<p>&gt; &lt; =</p>	
	<p>&gt; &lt; =</p>	
	<p>&gt; &lt; =</p>	










# Greater Than or Less Than Answers

Compare these numbers in numerals and words. Circle the correct sign.



 <p>50</p>	<p><input type="radio"/> &gt;   <input type="radio"/> &lt;   <input type="radio"/> =</p>	 <p>forty-nine</p>
 <p>two tens and three ones</p>	<p><input type="radio"/> &gt;   <input checked="" type="radio"/> &lt;   <input type="radio"/> =</p>	 <p>32</p>
 <p>87</p>	<p><input type="radio"/> &gt;   <input type="radio"/> &lt;   <input checked="" type="radio"/> =</p>	 <p>eighty-seven</p>
 <p>sixty-three</p>	<p><input checked="" type="radio"/> &gt;   <input type="radio"/> &lt;   <input type="radio"/> =</p>	 <p>36</p>

	$\bigcirc >$ $<$ $=$	
	$\bigcirc >$ $<$ $=$	
	$>$ $\bigcirc <$ $=$	
	$>$ $\bigcirc <$ $=$	