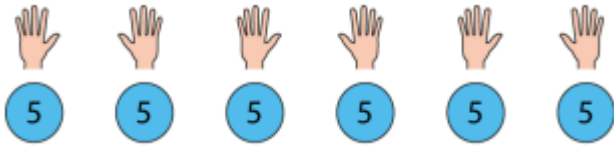


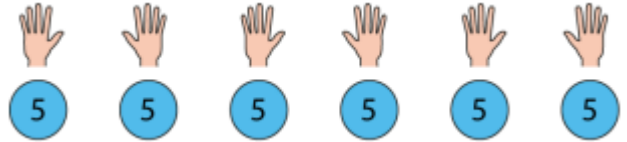
$0 \times 5 = 0$
$1 \times 5 = 5$
$2 \times 5 = 10$
$3 \times 5 = 15$
$4 \times 5 = 20$
$5 \times 5 = 25$
$6 \times 5 = 30$
$7 \times 5 = 35$
$8 \times 5 = 40$
$9 \times 5 = 45$
$10 \times 5 = 50$
$11 \times 5 = 55$
$12 \times 5 = 60$

31.01.22

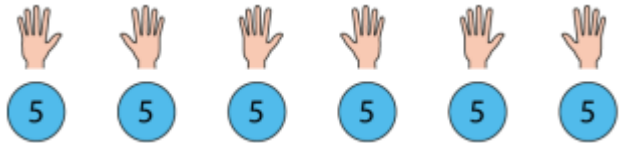
L.O: To represent the ten times table in different ways.



$6 \times 5 = \underline{\quad}$



$\underline{\quad} \times 5 = 25$



$\underline{\quad} \times \underline{\quad} = 60$




Fill in the boxes...

0	5	10	15	20										
---	---	----	----	----	--	--	--	--	--	--	--	--	--	--

60	55	50												
----	----	----	--	--	--	--	--	--	--	--	--	--	--	--

<input type="text" value="1"/>	<input type="text"/>		<input type="text" value="0"/>	<input type="text"/>	
<input type="text" value="3"/>	<input type="text"/>		<input type="text" value="2"/>	<input type="text"/>	
<input type="text" value="5"/>	$\times 5 =$	<input type="text"/>	<input type="text" value="4"/>	$\times 5 =$	<input type="text"/>
<input type="text" value="7"/>	<input type="text"/>		<input type="text" value="6"/>	<input type="text"/>	
<input type="text" value="9"/>	<input type="text"/>		<input type="text" value="8"/>	<input type="text"/>	

True or false?

	<input type="checkbox"/>	$5 \times 9 = 45$	<input type="checkbox"/>
$9 + 5 = 45$	<input type="checkbox"/>		<input type="checkbox"/>
	<input type="checkbox"/>	$9 \times 5 = 45$	<input type="checkbox"/>