

Q1. Kim knows that

$$137 \times 28 = 3836$$

Explain how she can use this information to work out this multiplication.

$$138 \times 28$$



.....

.....

.....

1 mark

Q2. Calculate 431×23



Show
your **working**.
You may get
a mark

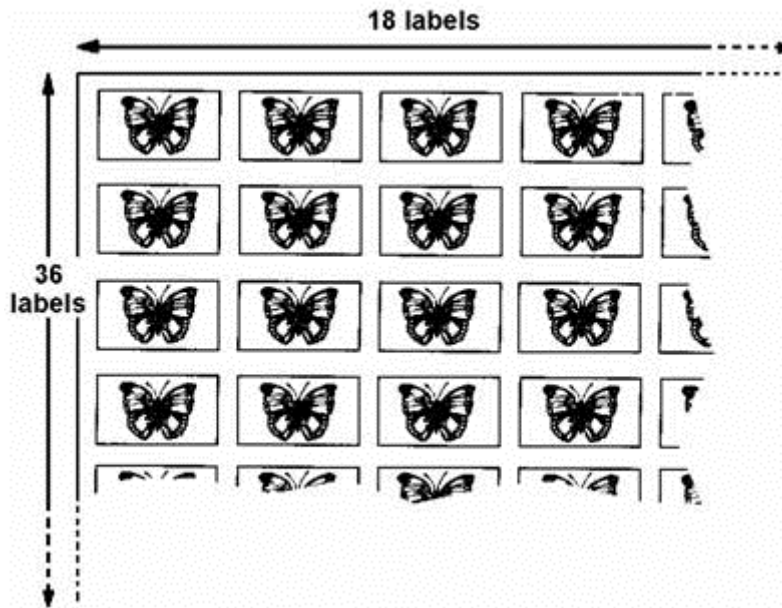
2 marks

Q3. Calculate 58×6

1 mark

##

A shop sells sheets of sticky labels.
On each sheet there are **36 rows** and **18 columns** of labels.



How many labels are there altogether on **45 sheets**?

2 marks


Q5. Calculate 268×53



Show your **working**.
You may get a mark

2 marks

Q6. Write the **three prime numbers** which multiply to make **231**


$$\square \times \square \times \square = 231$$

1 mark

Q7. Calculate 509×24



Show your **working**.
You may get a mark

2 marks

Q8. Use a calculator to work out $49.3 \times (2.06 + 8.5)$



1 mark

Q9. Write in the **two** missing digits.



$$\boxed{} \boxed{0} \times \boxed{} \boxed{0} = \boxed{3} \boxed{0} \boxed{0} \boxed{0}$$

1 mark

Q10.

7.4

8.1

9.4

10

Which two of these numbers, when multiplied together, have the answer closest to 70?



and

1 mark

Q11.

Calculate **143 × 37**



Show
your **working**.
You may get
a mark



2 marks

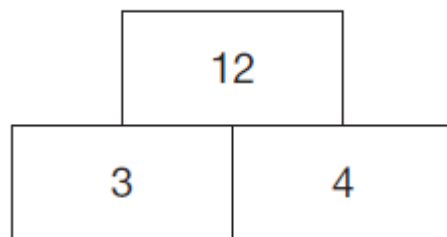
Q12. Calculate 560×28



Show your working

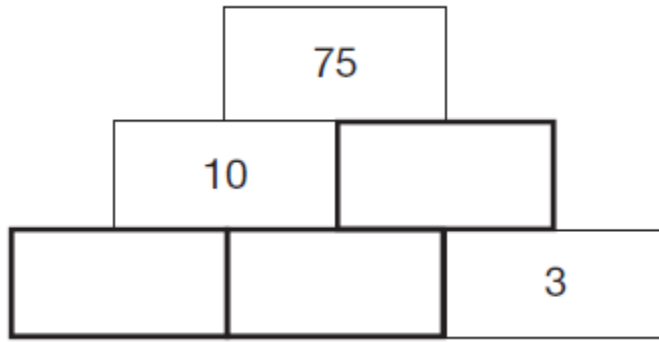
2 marks

Q13. In this tower, two numbers are **multiplied** to give the number above.



Write the missing numbers in the tower below to make it correct.





2 marks