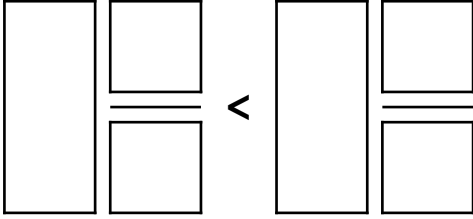
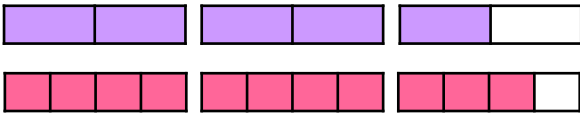


## Compare and Order Fractions Greater than 1

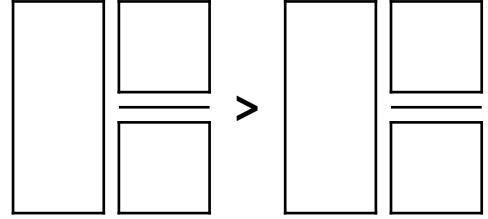
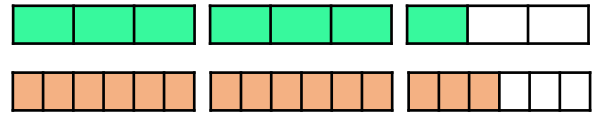
1a. Using the representations below, complete the statement.



VF



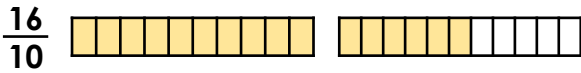
## Compare and Order Fractions Greater than 1

1b. Using the representations below, complete the statement.




VF

2a. Rewrite the sequence  $\frac{6}{5}, \frac{7}{5}, \frac{18}{10}$  to include the fraction  $\frac{16}{10}$ .



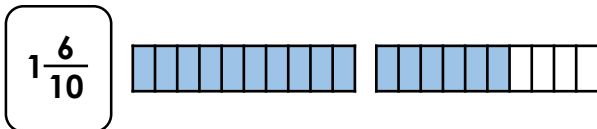
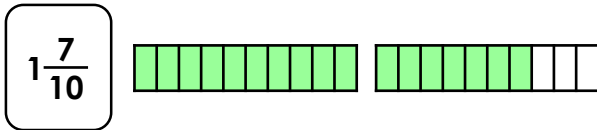
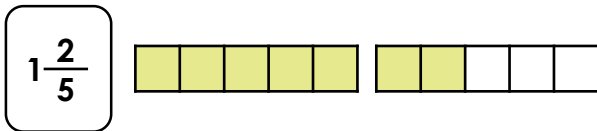
VF

2b. Rewrite the sequence  $\frac{5}{4}, \frac{7}{4}, \frac{16}{8}$  to include the fraction  $\frac{12}{8}$ .



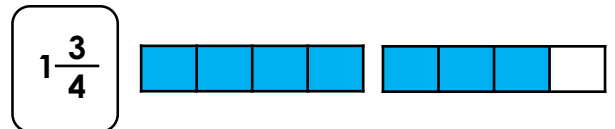
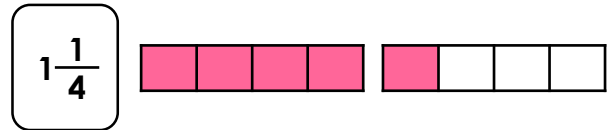
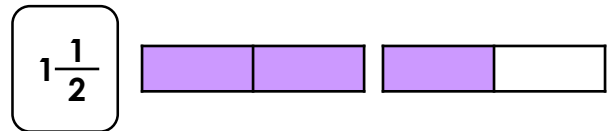
VF

3a. Order the fractions from smallest to greatest.



VF

3b. Order the fractions from smallest to greatest.



VF