



Samuels lunch box weighs 2kg. Emily's lunch box weighs 3.5kg. Kauri's lunch box weighs more than Samuals but not as much as Emily's. How much could Kauri's lunch box weigh?



The weight of a chapter book is 500g. The weight of a dictionary is 3kg. Are four chapter books heavier than a dictionary?




Which of these would weigh about 1kg?



If a black stone and a white stone weighed together have the same mass as a grey stone, which stone is the heaviest?



Which scale shows more?



In a bakery, 12 cupcakes needed 500g of flour. How much flour will be needed for 24 cupcakes?



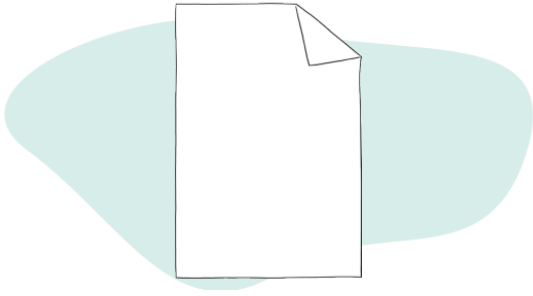
Hinano mailed 3 parcels to her grandma. The first parcel weighed 2kg, the second weighed 1kg, and the third weighed 3kg. What was the total mass of all 3 parcels?



Aroha was baking. She started with 1kg of sugar and used 300g. How much sugar did she have left?



A teacher had 400g of white paper and twice as much blue paper. How much did the blue paper weigh?



If one apple weighs 25g, how many apples would make 1kg?

