

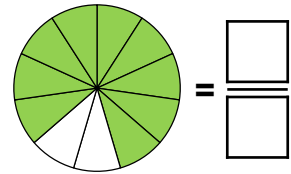
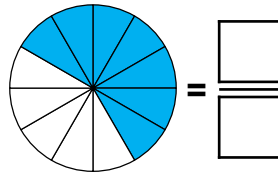
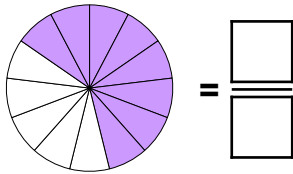
Multiply Unit Fractions by an Integer

1. Match the calculations to the images and complete the answers.

A. $\frac{1}{11} \times 9$

B. $\frac{1}{13} \times 8$

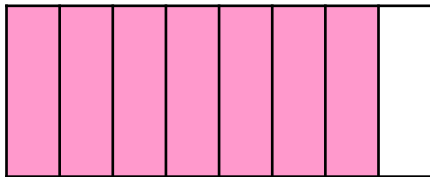
C. $\frac{1}{12} \times 7$



VF
HW/Ext

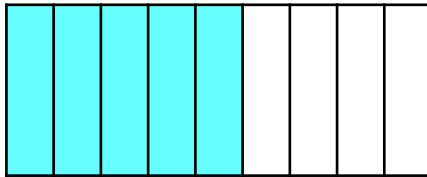
2. Tick the correct calculation(s).

A.



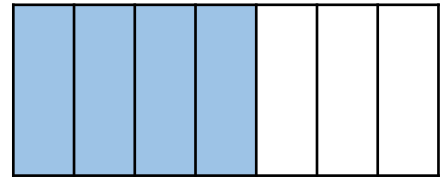
$$\frac{1}{8} \times 7 = \frac{7}{8}$$

B.



$$\frac{1}{9} \times 5 = \frac{5}{9}$$

C.



$$\frac{1}{7} \times 4 = \frac{4}{28}$$



VF
HW/Ext

3. Moff and Nadia are multiplying unit fractions by a whole number.

Moff says,



If I multiply $\frac{1}{5}$ by 3 then my answer will equal $\frac{3}{5}$.

Nadia says,



If I multiply $\frac{1}{5}$ by 3 then my answer will equal $\frac{3}{15}$.



Who is correct? Explain your answer.



RPS
HW/Ext