

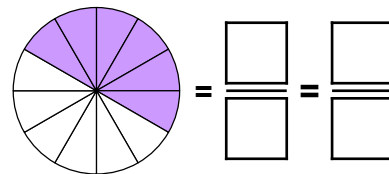
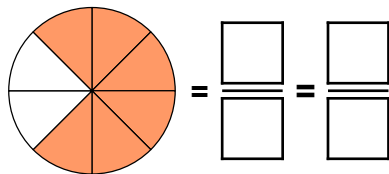
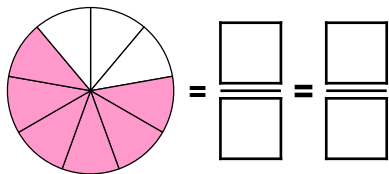
# Multiply Unit Fractions by an Integer

4. Match the calculations to the images and complete the answers.

A.  $\frac{1}{8} \times 6$

B.  $\frac{1}{12} \times 6$

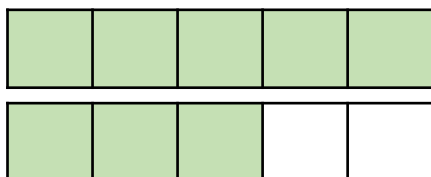
C.  $\frac{1}{9} \times 6$



VF  
HW/Ext

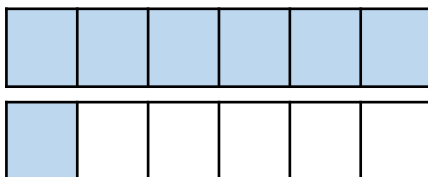
5. Tick the correct calculation(s).

A.




$\frac{1}{5} \times 8 = 1 \frac{3}{40}$

B.



$\frac{1}{6} \times 7 = 1 \frac{7}{6}$

C.



$\frac{1}{4} \times 5 = 1 \frac{1}{4}$



VF  
HW/Ext

6. Simon and Debbie are multiplying unit fractions by a whole number.

Simon says,



If I multiply  $\frac{1}{7}$  by 9 then my answer will equal  $1 \frac{1}{7}$ .

Debbie says,



If I multiply  $\frac{1}{7}$  by 9 then my answer will equal  $1 \frac{2}{7}$ .

Who is correct? Explain your answer.



RPS  
HW/Ext