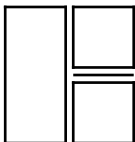
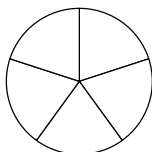
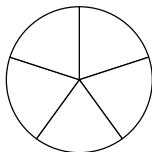
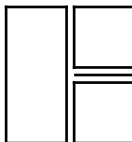


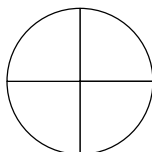
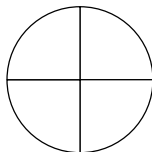
Multiply Unit Fractions by an Integer

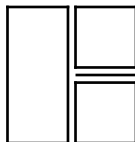
7. Solve the calculations and complete the images.

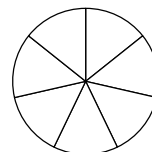
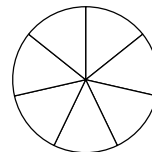
A. $\frac{1}{5} \times 7 =$ 



B. $\frac{1}{4} \times 5 =$ 




C. $\frac{1}{7} \times 9 =$ 



VF
HW/Ext

8. Tick the correct calculation(s).

A.



$\frac{1}{4} \times 8 = 1 \frac{1}{32}$



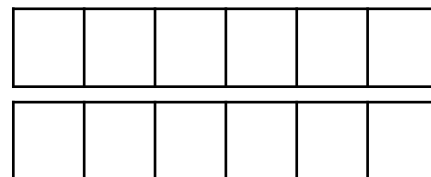
B.



$\frac{1}{4} \times 6 = 1 \frac{1}{2}$



C.



$\frac{1}{6} \times 8 = 1 \frac{1}{3}$



VF
HW/Ext

9. Jonny and Liz are multiplying unit fractions by a whole number.

Jonny says,



If I multiply $\frac{1}{6}$ by 9 then my answer will equal $1 \frac{1}{2}$.

Liz says,



If I multiply $\frac{1}{6}$ by 9 then my answer will equal $1 \frac{1}{3}$.

Who is correct? Explain your answer.



RPS
HW/Ext