



Multiply Non-Unit Fractions by an Integer

4. Identify the missing numbers in the calculations.

A. $\frac{2}{\square} \times 5 = 3 \frac{\square}{3}$

B. $\frac{\square}{9} \times 8 = 1 \frac{7}{\square}$



VF
HW/Ext

5. Complete the calculations and sort them into the Venn diagram below.

More than one Can be simplified

A. $\frac{5}{11} \times 3$

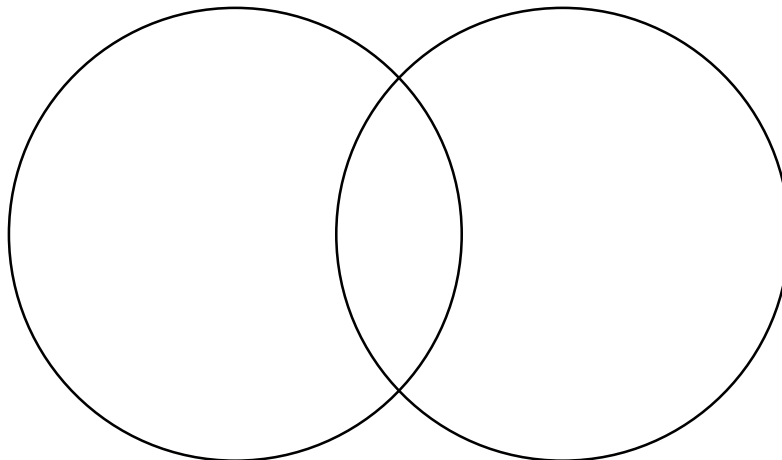
D. $\frac{2}{5} \times 3$

B. $\frac{2}{8} \times 3$

E. $\frac{2}{6} \times 2$

C. $\frac{5}{12} \times 2$

F. $\frac{4}{7} \times 4$



VF
HW/Ext

6. Eduardo is thinking of a non-unit fraction with a single digit denominator.

When he multiplies his fraction by 5 he gets a mixed number.

When he multiplies his fraction by 3 he can simplify the answer.

When he multiplies his fraction by 4 he gets a whole number.

What is Eduardo's fraction?



RPS
HW/Ext